

1

The selling price of an apartment is directly proportional its area. If an apartment of 127 sqm is sold for \$168,275, what would be the price of a 156 sqm apartment?

- A. 237,900\$
- B. 208,500\$
- C. 136,993\$
- D. 206,700\$

2

In 2007, a watch manufacturer found that 2 out of every 30 watches produced are defected.

If the manufacturer produces 2 million watches in a year, which of the following is closest to the estimated number of non-defected watches?

- A. 1,866,000
- B. 1,867,000
- C. 133,000
- D. 134,000

3

Horsepower and watts are units of measure of power. They are directly proportional such that 5 horsepower is equal to 3730 watts. How much power, in watts, is equal to 2 horsepower?

4

Bob is paid an hourly rate. One week he earned 165 \$ by working 30 hours. If he works 40 hours the next week, how much will he earn?

$$\begin{array}{rcl} \$ & & h \\ 165 & \swarrow & 30 \\ x & & 40 \end{array}$$

$$\frac{40 \times 165}{30} = 220$$

5

The concentration of solution in sugar is directly proportional to the mass of sugar dissolved in the solution. If the concentration of a solution is 1.5mol/L when 54g are dissolved, how many grams are dissolved if the concentration is 2.1mol/L?

$$\begin{array}{rcl} \text{mol/L} & & g \\ 1.5 & \swarrow & 54 \\ 2.1 & & x \end{array}$$

$$\frac{54 \times 2.1}{1.5} = 75.6$$

6

The distance a certain object travels is proportional to the amount of time the object is in motion. If the object travels 60 feet in 20 seconds, how many feet does the object travels in 90 seconds?

$$\begin{array}{rcl} ft & & sec \\ 60 & \swarrow & 20 \\ x & & 90 \end{array}$$

$$\frac{60 \times 90}{20} = 270$$

- A) 30
- B) 50
- C) 130
- D) 270



7

Maria downloaded to her music library a total of 350 pop and rock songs. If the ratio of pop to rock song is 3 to 11. How many rock songs are there in Maria's library?

- A. 75
- B. 125
- C. 175
- D. 275

8

If  $y$  varies directly as the cube of  $2x$ , and  $y = 8$  when  $x = 2$ , what is  $y$  when  $x$  is equal to 4? (grid-in)

9

Tanta University is an Egyptian university located in Tanta, Egypt. Since 1962, the administration was developed and was able to create more than 10 faculties. Statistics show, in an old release, that 3,636 students attend the Faculty of Medicine, and the ratio of female students to male students is 11:25. How many male students are attending the faculty?

- A. 2,544
- B. 2,525
- C. 2,000
- D. 1,604

$$\begin{array}{l} F : M : \text{Total} \\ 11 : 25 : 36 \\ x : 3636 \\ \hline 25 \times 3636 = 2525 \\ 36 \end{array}$$

10

If  $h$  varies inversely as  $k$ , and  $h = 9$  when  $k = 20$ , what is the value of  $k + 4$  when  $h = 15$ ? (grid-in)

$$\begin{array}{l} h \quad k \\ 9 \quad 15 \quad 20 \\ 15 \quad 9 \quad k \\ \hline k = \frac{9 \times 20}{15} = 12 \\ k + 4 = 12 + 4 \\ 16 \end{array}$$





1

A company lost 20% of their stock the first year, then 26% the second year. In the third year, their stock increased by 30%. Which of the following statements is true?

- A. The company's stock increased by 23.04% in comparison with the price of the stock before the start of the loss.
- B. The company's stock decreased by 23.04% in comparison with the price of the stock before the start of the loss.
- C. The company's stock decreased by 76.96% in comparison with the price of the stock before the start of the loss.
- D. The company's stock increased by 76.96% in comparison with the price of the stock before the start of the loss.

2

From 2018 to 2019, the amount in Julias's bank account increased by 22.5% to \$14325. To the nearest dollar, what was the initial amount in her bank account?

- A. 11694\$
- B. 14010\$
- C. 11102\$
- D. 12775\$

3

A local supermarket offered a discount of 15% on its items after the government raised all the prices by 25%. Overall, by what percentage were the original prices raised in this supermarket in particular?

- A. 8.625%
- B. 7.250%
- C. 6.250%
- D. 5.625%

$$0.85 \times 1.25 = 1.0625 \times 100 = 106.25\%$$

4

The budget for a school band was \$8,000 in 2010. The budget decreased by 15% from 2010 to 2011 and then increased by 22% from 2011 to 2012. Which of the following expressions represents the budget, in dollars, for the school band in 2012?

- A.  $(1.15)(1.22)(8,000)$
- B.  $(0.85)(1.22)(8,000)$
- C.  $(1.15)(0.78)(8,000)$
- D.  $(0.85)(0.78)(8,000)$



5

The price of the COVID-19 vaccine in the black market was first increased by 15% and then increased by 10% after two weeks. What is the percent increase in the price of the vaccine?

- A. 126.5%
- B. 26.5%
- C. 25%
- D. 1.265%

6

If the speed of an airplane is now 127% of its previous speed, which of the following must also be true?

- A) The speed of the airplane has increased by 27% from its previous speed.
- B) The speed of the airplane has increased by 73% from its previous speed.
- C) The speed of the airplane is now 127 miles per hour.
- D) The speed of the airplane is now 27 miles per hour faster than its previous speed.

7

A stock increased in value by 7% on Wednesday and then decreased in value by 4% on Thursday. What was the net percentage increase in the value of the stock from the end of the day on Tuesday to the end of the day on Thursday?

- A) 2.72%
- B) 2.88%
- C) 3.00%
- D) 3.28%

$$1.07 \times 0.96 = 1.0272 \times 100 = 102.72\%$$

8

$$c(t) = 1,870(1.025)^t$$

The function above models the number of capybaras,  $c(t)$ , living in a section of tropical forest in Brazil, where  $t$  is the number of years since 2010. Which of the following is the best interpretation of the value 1.025 in the context?

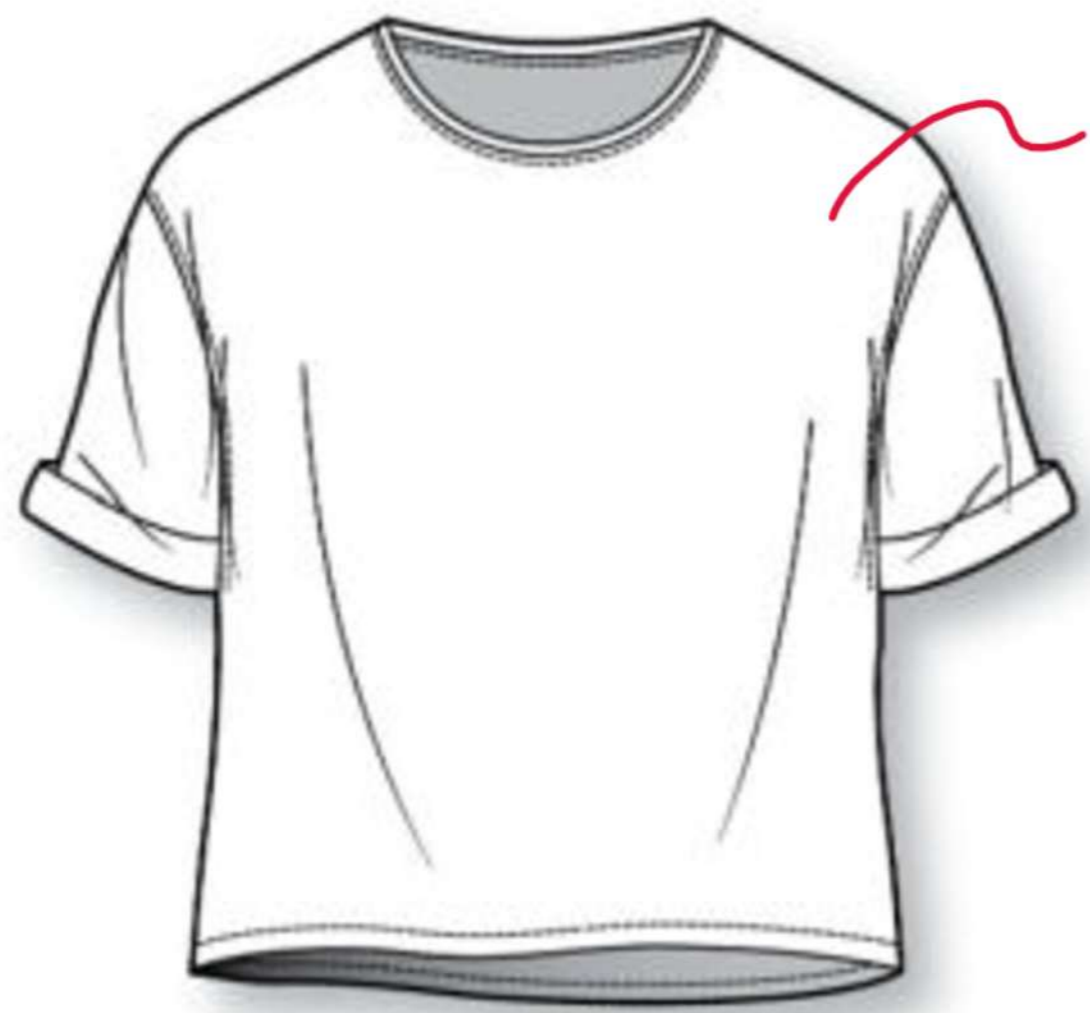
- A) Each year, the number of capybaras is increasing by approximately 1 from the preceding year.
- B) Each year, the number of capybaras is increasing by approximately 25 from the preceding year.
- C) Each year, the number of capybaras is increasing by approximately 2.5% from the preceding year.
- D) Each year, the number of capybaras is increasing by approximately 125% from the preceding year.



## Basics

## Percentage (Change)

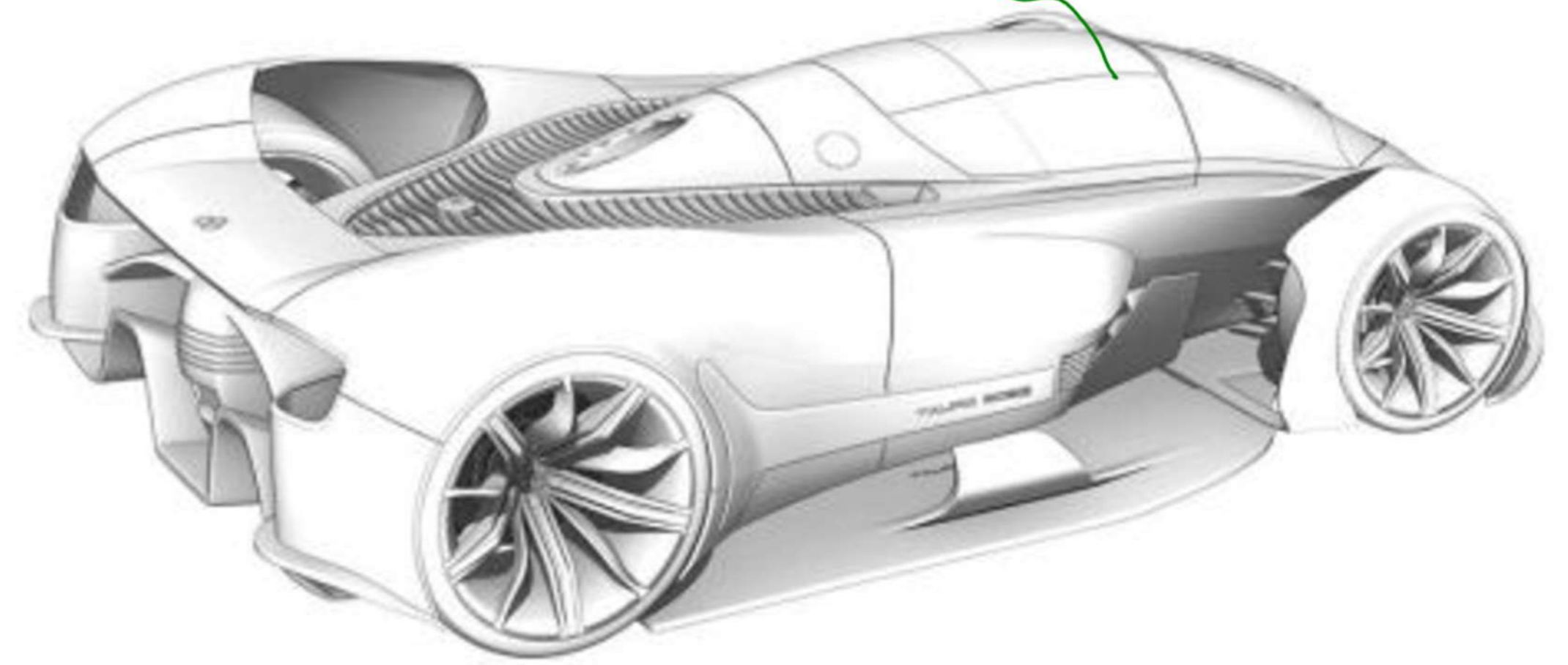
$$\% \text{ change} = \frac{\text{New} - \text{old}}{\text{old}} \times 100$$



~~\$150~~ old  
\$120 New

$$\frac{N - O}{O} \times 100$$

$$\frac{120 - 150}{150} \times 100 = -20\%$$



\$60,000 New  
~~50,000\$~~ old

$$\frac{N - O}{O} \times 100$$

$$\frac{60000 - 50000}{50000} \times 100$$

Mr. Kably



1

The original price of an article is 30,000 <sup>old</sup> EGP and its discount price is 27,600 <sup>New</sup> EGP. What is the **discount** percent?

$$\frac{N - O}{O} \times 100$$

$$\frac{27600 - 30000}{30000} \times 100 = -8\%$$

8

2

Gold is one of the most important items in the world. Its price increases and decreases every day. The average closing price for the past 8 years is shown in the table below.

Year	Average Closing Price (\$)
2020	1,771.9 <sup>New</sup>
2019	1,393.34
2018	1,268.93 <sup>old</sup>
2017	1,251.92
2016	1,158.86
2015	1,266.06
2014	1,409.51
2013	1,668.86

Which of the following statements is true when comparing the annual **percentage change** from **2018** to **2020**?

- ☒ A. It increased by 27.17%.  
☒ B. It decreased by 27.17%.  
☐ C. It decreased by 39.64%.  
☒ D. It increased by 39.64%.

$$\frac{N - O}{O} \times 100$$

$$\frac{1771.9 - 1268.93}{1268.93} \times 100 = 39.64$$

3

A magazine article on video game habits in the United States reported that in 2012 gamers spent an average of 5.6 hours per week playing games. The article also reported the average for 2013 to be 6.3 hours per week. Based on the article, how did the average number of hours that gamers spent playing games per week change from 2012 to 2013?

- A. It decreased by 12.5%.  
 B. It increased by 7.0%.  
 C. It increased by 11.1%.  
 D. It increased by 12.5%.

4

Census blocks are geographic areas defined by the US Census Bureau. The residents in each block are counted each decade. The table below shows the total number of census blocks for the 5 states that had the cost census blocks in 2000 and 2010.

State	Number of census blocks in 2000	Number of census blocks in 2010
Alaska	21,874	45,292
Hawaii	18,990	25,016
Delaware	17,483	24,115
Rhode Island	21,023	25,181
Vermont	24,824	32,580
Total for these 5 states	104,194	152,184

What was the percent increase in the number of census blocks in Delaware from 2000 to 2010, rounded to the nearest tenth of a percent? (Disregard the % sign when gridding your answer. For example, if your answer is 78.2%, grid 78.2)



$$A = P(1 \pm r)^t$$

Final      initial       $t \leftarrow$  intervals

$P$   
\$5000, 10%, 4 years

$$A = P(1 \pm r)^t$$

$$= 5000(1.10)^4$$

**The Compound Interest Formula**

Amount      Interest Rate (decimal)

**$A = P(1 + \frac{r}{n})^{nt}$**       Time

Principal      Number of times interest is compounded per unit 't'

thecalculatorsite.com



1

In the year 1990, 12000 tourists visited country X. Due to bad weather conditions, the number of tourists visiting country X started decreasing by 10% per year. How many more tourists visited country X in the year 1993 than the year 2000? (Give the answer to the nearest whole number).

$$12000(0.90)^3 - 12000(0.90)^{10} = 4563.8 = 4564$$

2

In 2011, the population in Cairo was 9.12 million. Considering the population was increasing by 1% each year, what could be the approximate population in Cairo in 2022?

- A. 10.074154 million
- B. 10.123200 million
- C. 10.174896 million
- D. 10.276645 million

$$A = P(1 + r)^t = 9.12(1.01)^{11} = 10.174896$$

3

James adds to an oil tank 10 liters on day 1, then every day he adds 50% the amount he filled the day before.

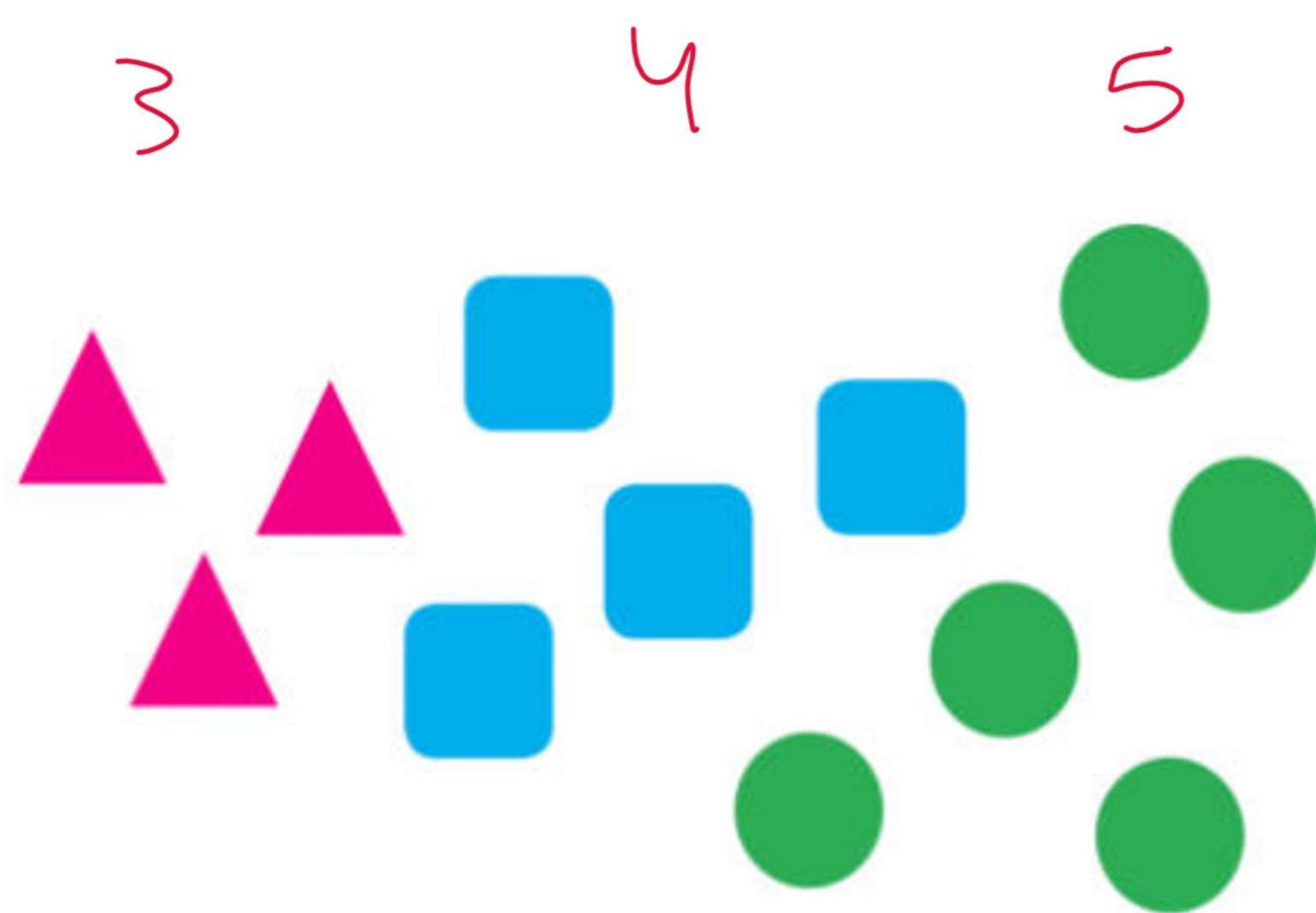
After 1000 days, how much oil is there approximately in the tank?

4

A company purchased a piece of equipment for \$40,000. Each year after the year of purchase, the value of the equipment is estimated to be 10% less than its value the previous year. Which of the following is closest to the estimated value of the equipment 4 years after it was purchased?

- A) \$2,000
- B) \$8,000
- C) \$24,000
- D) \$26,000





Part  
Total

$$P(\triangle) = \frac{3}{3+4+5}$$

$$P(\square) = \frac{4}{12}$$

$$P(\bigcirc) = \frac{3+4}{12}$$



1

In a farm, there are 30 rabbits of two sizes "small and big" and three colors "white, brown, and gray" as shown in the table below.

Color \ Size	White	Brown	Gray
Small	4	4	6
Big	10	2	4

One rabbit is selected at random from this farm.

Suppose that the selected rabbit is **not of white color**, what is the probability for this rabbit to be from the big size?

- A.  $\frac{3}{5}$   
 B.  $\frac{3}{7}$   
 C.  $\frac{8}{16}$   
 D.  $\frac{16}{30}$

$$\frac{\text{Part}}{\text{Total}} = \frac{2+4}{4+2+6+4}$$

2

In a bag, there are 12 identical tokens numbered from 1 to 12. A token is drawn at random. What is the probability to obtain an **even multiple of 3**?

- A.  $\frac{1}{4}$   
 B.  $\frac{1}{3}$   
 C.  $\frac{1}{2}$   
 D.  $\frac{1}{6}$

$$\frac{\text{Part}}{\text{Total}} = \frac{2}{12} = \frac{1}{6}$$

1, 3, 6, 9, 12, 15, 18, 21, 24, 27, 30, 33, 36, 39, 42, 45, 48, 51, 54, 57, 60, 63, 66, 69, 72, 75, 78, 81, 84, 87, 90, 93, 96, 99, 102, 105, 108, 111, 114, 117, 120, 123, 126, 129, 132, 135, 138, 141, 144, 147, 150, 153, 156, 159, 162, 165, 168, 171, 174, 177, 180, 183, 186, 189, 192, 195, 198, 201, 204, 207, 210, 213, 216, 219, 222, 225, 228, 231, 234, 237, 240, 243, 246, 249, 252, 255, 258, 261, 264, 267, 270, 273, 276, 279, 282, 285, 288, 291, 294, 297, 300, 303, 306, 309, 312, 315, 318, 321, 324, 327, 330, 333, 336, 339, 342, 345, 348, 351, 354, 357, 360, 363, 366, 369, 372, 375, 378, 381, 384, 387, 390, 393, 396, 399, 402, 405, 408, 411, 414, 417, 420, 423, 426, 429, 432, 435, 438, 441, 444, 447, 450, 453, 456, 459, 462, 465, 468, 471, 474, 477, 480, 483, 486, 489, 492, 495, 498, 501, 504, 507, 510, 513, 516, 519, 522, 525, 528, 531, 534, 537, 540, 543, 546, 549, 552, 555, 558, 561, 564, 567, 570, 573, 576, 579, 582, 585, 588, 591, 594, 597, 600, 603, 606, 609, 612, 615, 618, 621, 624, 627, 630, 633, 636, 639, 642, 645, 648, 651, 654, 657, 660, 663, 666, 669, 672, 675, 678, 681, 684, 687, 690, 693, 696, 699, 702, 705, 708, 711, 714, 717, 720, 723, 726, 729, 732, 735, 738, 741, 744, 747, 750, 753, 756, 759, 762, 765, 768, 771, 774, 777, 780, 783, 786, 789, 792, 795, 798, 801, 804, 807, 810, 813, 816, 819, 822, 825, 828, 831, 834, 837, 840, 843, 846, 849, 852, 855, 858, 861, 864, 867, 870, 873, 876, 879, 882, 885, 888, 891, 894, 897, 900, 903, 906, 909, 912, 915, 918, 921, 924, 927, 930, 933, 936, 939, 942, 945, 948, 951, 954, 957, 960, 963, 966, 969, 972, 975, 978, 981, 984, 987, 990, 993, 996, 999, 1000

3

In a farm, there are 30 rabbits of two sizes "small and big" and three colors "white, brown, and gray" as shown in the table below.

Color \ Size	White	Brown	Gray
Small	4	4	6
Big	10	2	4

One rabbit is selected at random from this farm.

What is the probability that the selected rabbit is white?

- A.  $\frac{4}{14}$   
 B.  $\frac{7}{15}$   
 C.  $\frac{1}{7}$   
 D.  $\frac{10}{30}$

4

In a bag there are 14 identical tokens numbered from 0 to 13. A token is drawn at random. What is the probability to obtain an odd multiple of 3?

- A.  $\frac{3}{14}$   
 B.  $\frac{2}{5}$   
 C.  $\frac{1}{7}$   
 D.  $\frac{2}{13}$



5

Ice Cream and Topping Selections

		Flavor	
		Vanilla	Chocolate
Topping	Hot fudge	8	6
	Caramel	5	6

The table above shows the flavors of ice cream and the toppings chosen by the people at a party. Each person chose one flavor of ice cream and one topping. Of the people who chose vanilla ice cream, what fraction chose hot fudge as a topping?

A)  $\frac{8}{25}$

B)  $\frac{5}{13}$

C)  $\frac{13}{25}$

D)  $\frac{8}{13}$

$$\frac{\text{Part}}{\text{Total}} = \frac{8}{8+5}$$

6

Employees at the PQM Corporation

Specialist level	Salary grade			Total
	A	B	C	
I	10	1	0	11
II	6	10	8	24
III	0	6	15	21
Total	16	17	23	56

What fraction of employees who are level II specialists are in either salary grade B or C?

$$\frac{\text{Part}}{\text{Total}} = \frac{10+8}{24} = \frac{3}{4}$$

7

Class	Native continent	
	Australia	Africa
Mammals	8	6
Reptiles	9	17
Birds	27	23

The table above shows the numbers of animals classified by class and native continent for all 90 animals at a local zoo. What fraction of the reptiles are native to Australia?

A)  $\frac{1}{10}$

B)  $\frac{9}{44}$

C)  $\frac{13}{45}$

D)  $\frac{9}{26}$

8

Number of Flight Arrivals at Centerville Airport in a Month

	On time	Delayed	Total
Airline A	2,029	861	2,890
Airline B	1,150	700	1,850
Total	3,179	1,561	4,740

Based on the table above, what fraction of the flights for Airline A were delayed?

A.  $\frac{700}{1,850}$

B.  $\frac{861}{1,561}$

C.  $\frac{861}{2,890}$

D.  $\frac{2,029}{2,890}$


Mr. Kably



"Average"  $\text{Mean} = \frac{\text{Sum}}{\text{no.}}$

Mode = Most repeated

Median = Middle "arrangement"

Range = 

7, 2, 17, 11, 2

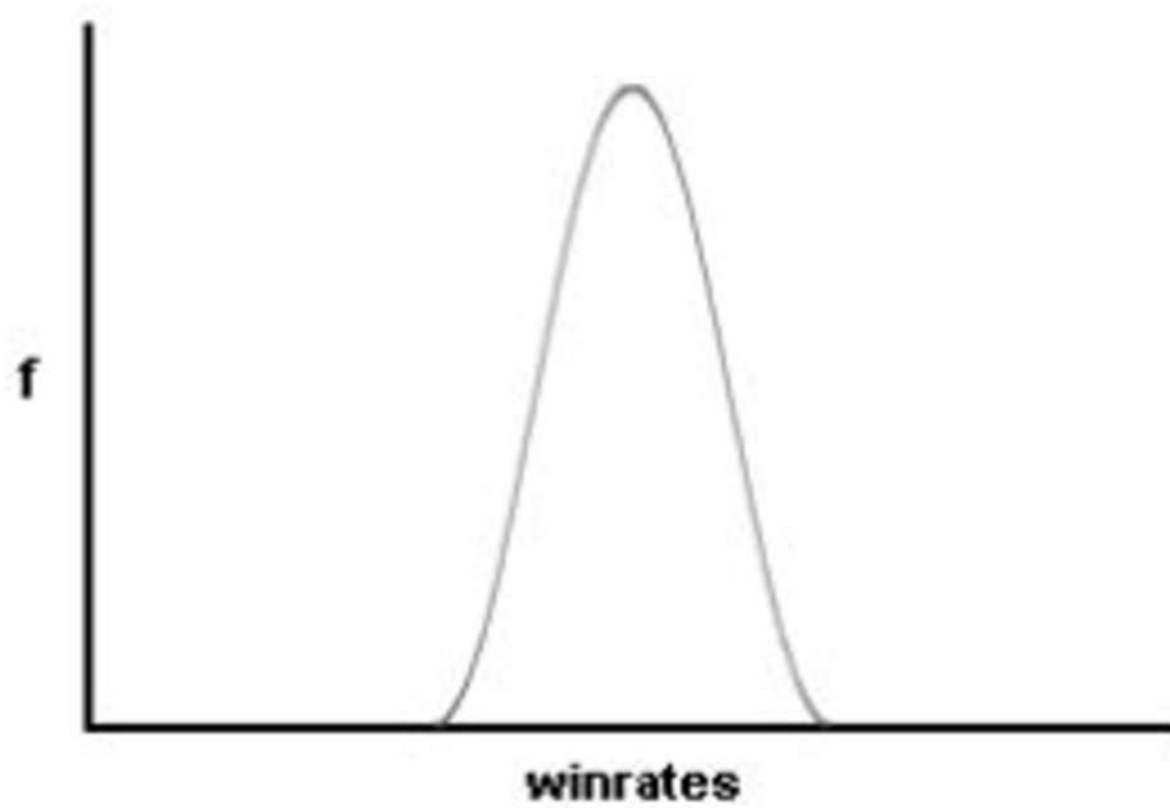
Mean =  $\frac{7 + 2 + 17 + 11 + 2}{5} = 7.8$

Mode = 2

Median = 7 

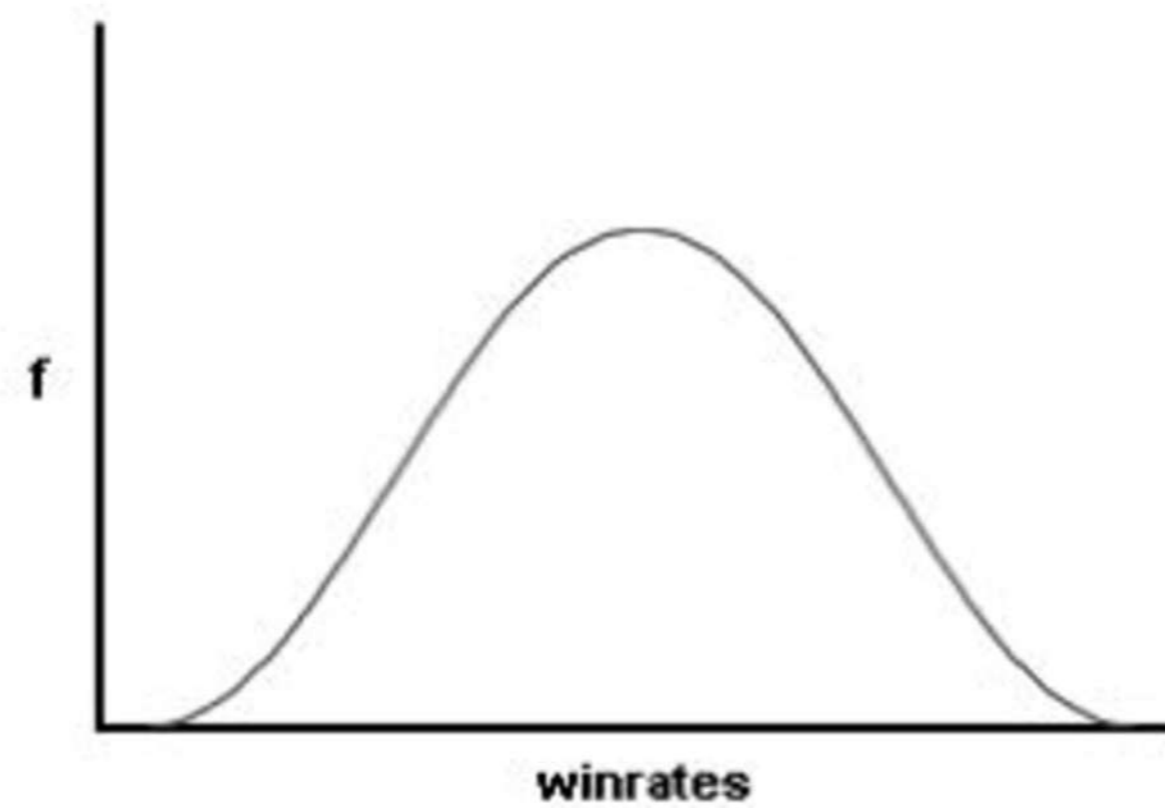
Range =  $17 - 2 = 15$

Low Standard Deviation



A "thin" curve means that your winrates remain close to the mean average.

High Standard Deviation



A "fat" curve means that there is a wider spread of your winrates.



Basics

$$\frac{n}{2} + \frac{1}{2}$$

$$\frac{7}{2} + \frac{1}{2} = 4$$

1

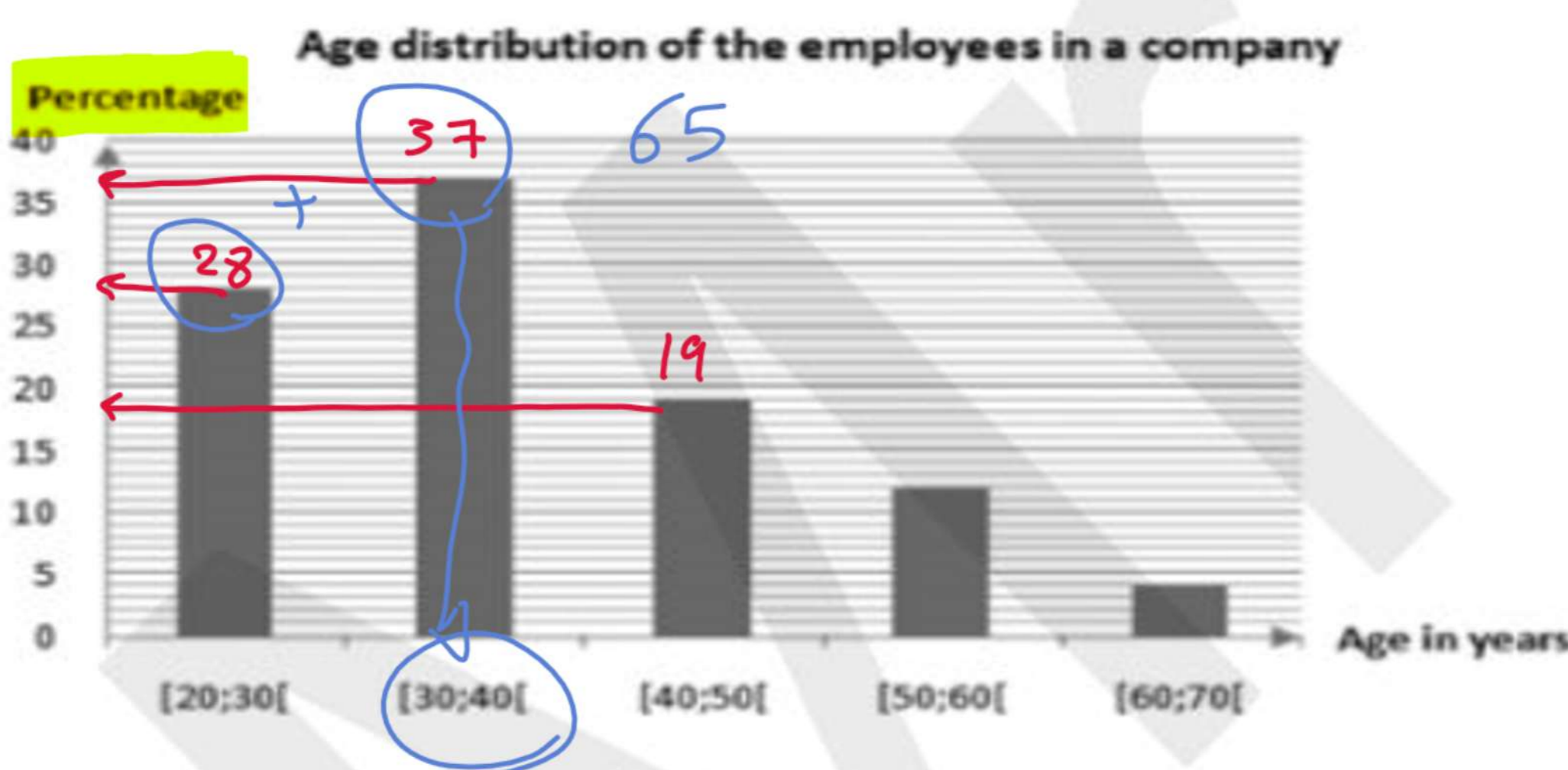
Data Set A	11.54	23.06	32.52	7.72	15.13	15.77	34.20
Data Set B	25.20	8.39	15.19	6.48	12.83	13.30	13.60

A complete list of values for each of two separate data sets is shown in the table above. What is the positive difference between the median of Data Set A and the median of Data Set B?

$$15.77 - 13.30 = 2.47$$

2

The bar graph below shows the age distribution of the employees in a multi-branched bank.



In which interval does the median age lie?

- A. [20;30[
- B. [30;40[
- C. [40;50[
- D. [50;60[

S.D, Mean, Mode, Median, and Range

3

137, 163, 115, 137, 179, 155, 171

A geologist recorded the heights, in feet, of a geyser's eruptions over a twelve-hour period. The heights are given in the list above. What is the median height recorded by the geologist?

- A) 115
- B) 137
- C) 151
- D) 155

4

Number of States with 10 or More Electoral Votes in 2008

Electoral votes	Frequency
10	4
11	4
12	1
13	1
15	3
17	1
20	1
21	2
27	1
31	1
34	1
55	1

In 2008, there were 21 states with 10 or more electoral votes, as shown in the table above. Based on the table, what was the median number of electoral votes for the 21 states?

- A) 13
- B) 15
- C) 17
- D) 20

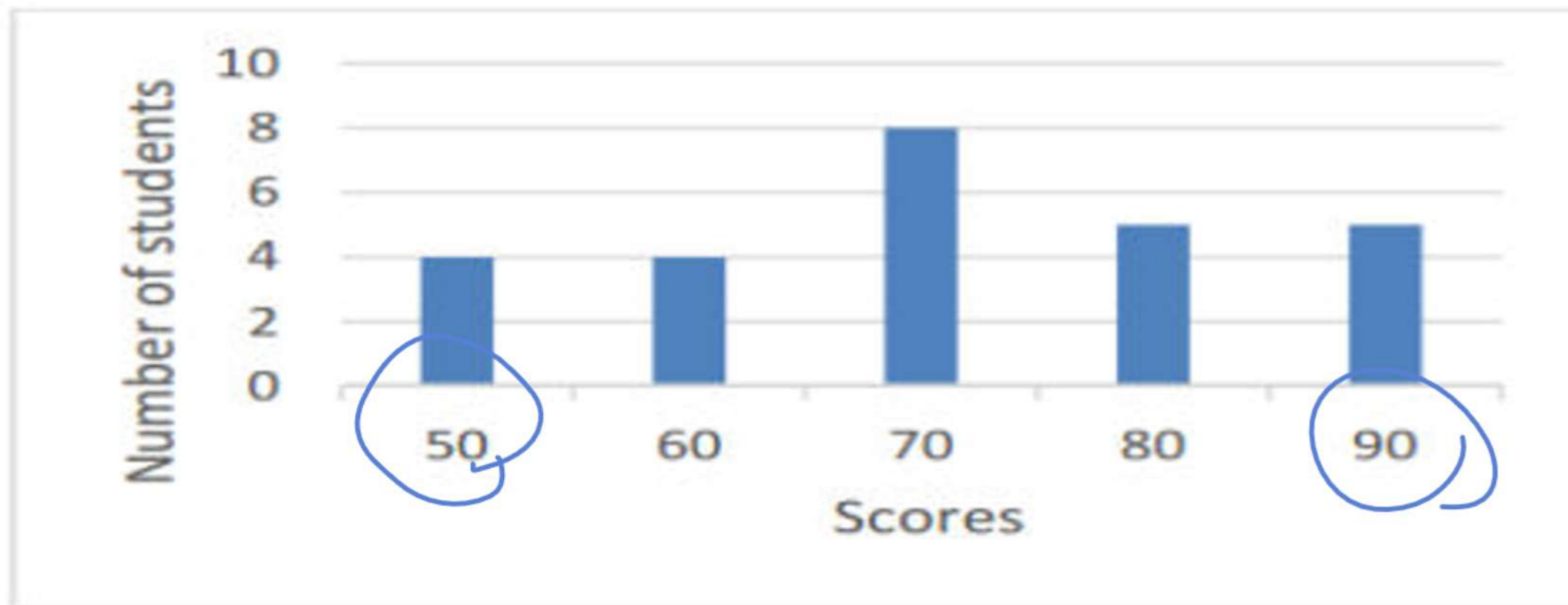
Mr. Kably



## Basics

## S.D, Mean, Mode, Median, and Rang

5



The above bar chart shows the scores of a philosophy test over 100.

What is the range of the scores?

- A. 40
- B. 3
- C. 10
- D. 20

$$\begin{aligned} \text{Range} &= 90 - 50 \\ &= 40 \end{aligned}$$

6

The table below shows the distance Amir walked every day during the first week of April, 2021.

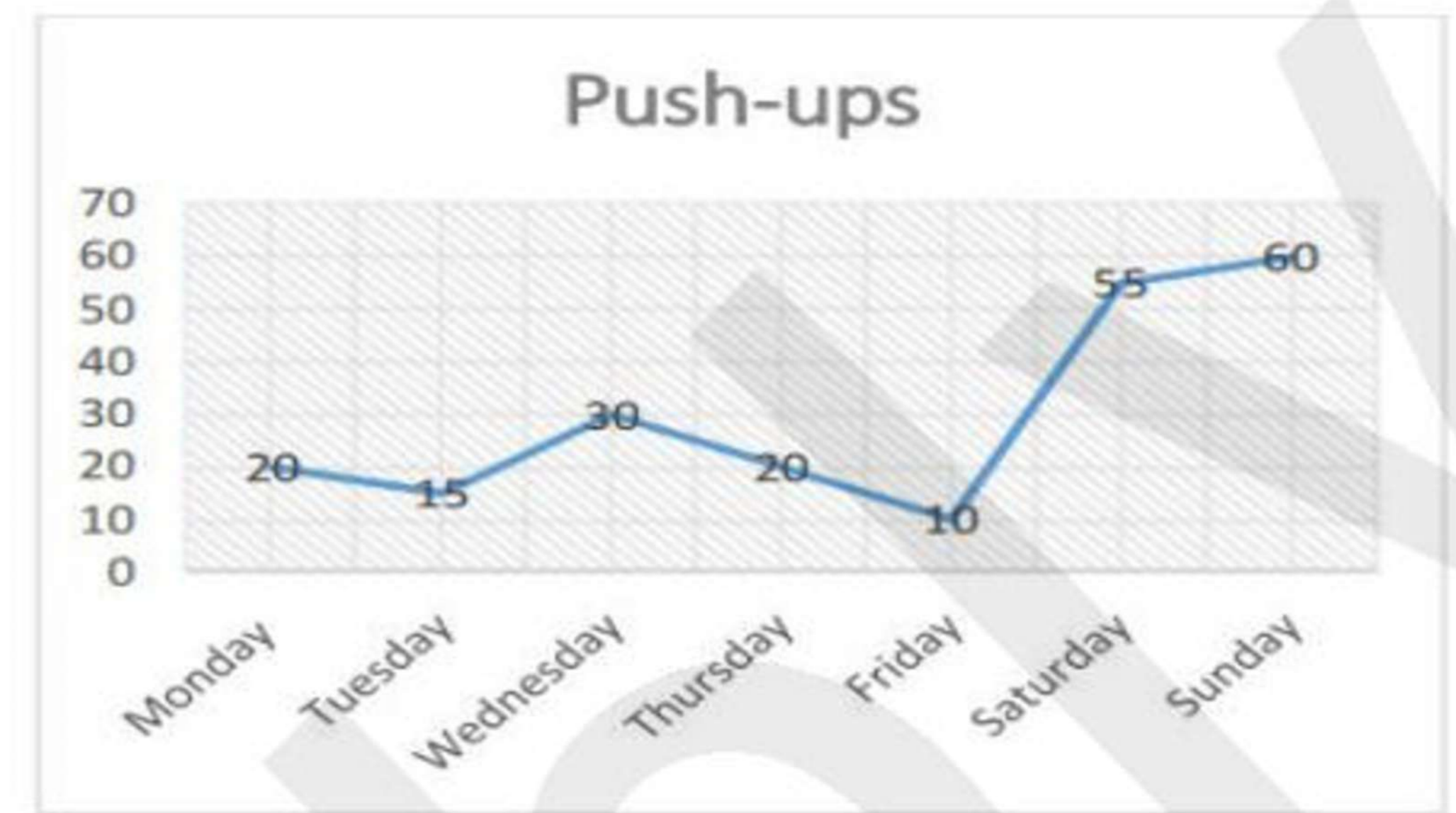
	Distance (in m)
Thursday, April 1 <sup>st</sup>	1678
Friday, April 2 <sup>nd</sup>	2091
Saturday, April 3 <sup>rd</sup>	1245
Sunday, April 4 <sup>th</sup>	1566
Monday, April 5 <sup>th</sup>	2100
Tuesday, April 6 <sup>th</sup>	1989
Wednesday, April 7 <sup>th</sup>	1888

What is the average (arithmetic mean) of the data shown in the table?

- A. 2511.4
- B. 1888
- C. 1793.9
- D. 1672.5

$$\text{Mean} = \frac{\text{Sum}}{\text{no}}$$

7



The graph above shows the number of push-ups Bob did last week.

What was the average number of push-ups?

8

Gold is one of the most important items in the world. Its price increases and decreases every day. The average closing price for the past 8 years is shown in the table below.

Year	Average Closing Price (\$)
2020	1,771.9
2019	1,393.34
2018	1,268.93
2017	1,251.92
2016	1,158.86
2015	1,266.06
2014	1,409.51
2013	1,668.86

What is the mean of the average closing price of the last 5 years according to the given table?

- A. 1,137.2
- B. 1,351.82
- C. 1,368.99
- D. 1,622.18

Mr. Kably



## Basics

## S.D, Mean, Mode, Median, and Range

9

A survey is done on 80 families from two cities A and B, separated into groups based on the number of cars they own. The results are shown in the table below.

Number of cars	City A	City B
45 = 1 x 45	= 25	+ 20
100 = 2 x 50	= 31	+ 19
111 = 3 x 37	= 14	+ 23
80 = 4 x 20	= 8	+ 12
40 = 5 x 8	= 2	+ 6

What is the mean number of cars owned by citizens in both cities A & B combined?


- A. Between 1 and 2  
 B. Between 2 and 3  
 C. Between 3 and 4  
 D. Between 4 and 5

$$\text{Mean} = \frac{\text{Sum}}{\text{no}}$$

$$= \frac{45 + 100 + 111 + 80 + 40}{80 + 80}$$

$$= 2.35$$

10



Based on the histogram above, of the following, which is closest to the average (arithmetic mean) number of seeds per apple?

- A) 4  
 B) 5  
 C) 6  
 D) 7

